

| عدد المسائل: خمسة | مسابقة في مادة الرياضيات المدة: ساعتان | الاسم: الرقم: |
|-------------------|---|------------------|
|-------------------|---|------------------|

ارشادات عامة :- يسمح باستعمال آلة حاسبة غير قابلة للبرمجة او اختزان المعلومات او رسم البيانات.
- يستطيع المرشح الإجابة بالترتيب الذي يناسبه دون الالتزام بترتيب المسائل الوارد في المسابقة .

I - (2 points)

Consider the three numbers A, B and C:

$$A = \frac{1}{3} + \frac{7}{6} \div \frac{5}{3} ; B = \frac{5 \times 10^{-2} \times 7 \times 10^5}{2 \times 10^7} \text{ and } C = \sqrt{45} - 4\sqrt{5} + 3\sqrt{125} .$$

In what follows, show all details of calculation:

- 1) Calculate A and write the answer as a fraction in the simplest form.
- 2) Calculate B and write the answer in scientific notation.
- 3) Write C in the form $a\sqrt{5}$ where a is a natural number.

II - (3 points)

The following two questions 1) and 2) are independent.

- 1) Solve the following inequality and represent the solution on a number line with origin O:

$$4x - \frac{3}{2} \leq \frac{5}{2}x + 3$$

- 2) A box contains 400 balls, distributed as follows:

- 30% of these balls are red
- 108 balls are green
- The remaining balls are white.

- a. Find the percentage of green balls.
- b. Calculate the number of white balls.

III - (3 points)

Given: $E(x) = 5(x - 1)(x + 2) - (x + 2)^2 + 3(x + 5)$.

- 1) Show that $E(x) = 4x^2 + 4x + 1$.
- 2) Solve the equation $E(x) = 1$.
- 3) Consider $H(x) = 9x^2 - (2x + 1)^2$.
 - a. Show that $H(x) = (5x + 1)(x - 1)$.
 - b. Solve the equation $H(x) = 0$.

IV- (6 points)

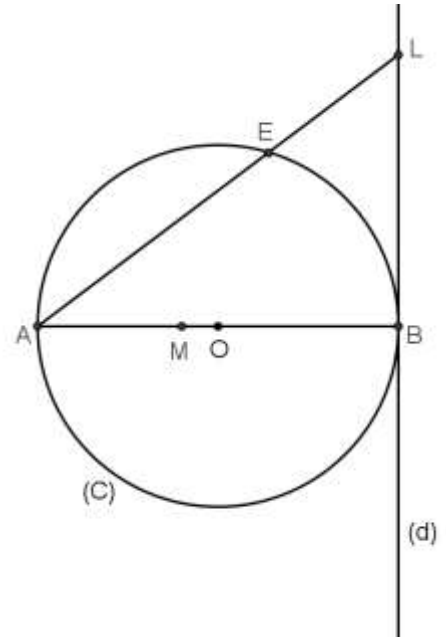
In an orthonormal system of axes ($x'Ox$, $y'Oy$), consider the line (d) with equation $y = -2x + 3$ and the points $A(0; -2)$, $E(6; 1)$ and $G(0; 3)$.

- 1) Plot the points A, E and G.
- 2) Verify that G is a point on line (d), then draw (d).
- 3) a. Show that $y = \frac{1}{2}x - 2$ is the equation of line (AE).
 - b. Prove that the lines (d) and (AE) are perpendicular.
 - c. Verify, by calculation, that B (2; -1) is the intersection point of lines (d) and (AE).
 - d. Prove that GBE is a right isosceles triangle.
- 4) Denote by M the translate of E under the translation with vector \overrightarrow{BG} .
 - a. Prove that the quadrilateral BEMG is a square.
 - b. Calculate BM.

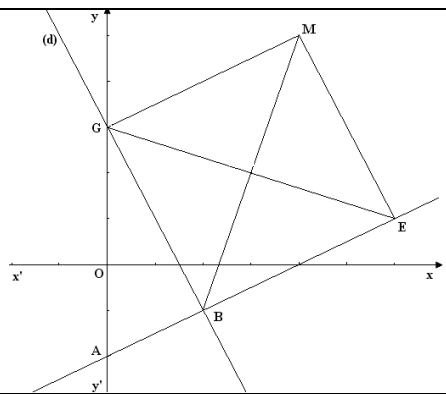
V- (6 points)

In the adjacent figure:

- (C) is a circle with center O and radius 5 cm
- [AB] is a diameter of this circle
- (d) is the tangent at B to (C)
- L is a point on (d) such that $BL = 7.5$ cm
- M is a point on [AB] such that $AM = 4$ cm.

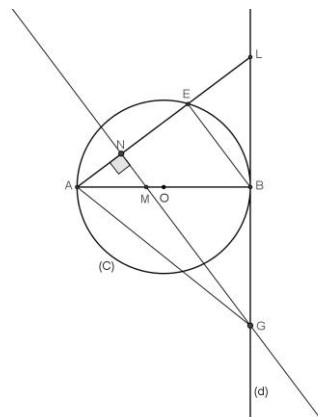


- 1) Copy the figure.
- 2) Calculate the length AL.
- 3) Calculate $\cos BAL$.
- 4) The line (AL) intersects the circle (C) at E.
 - a. Prove that the two triangles ABL and BEL are similar.
Write the ratio of similarity.
 - b. Deduce that $EL = 4.5$ cm.
- 5) The perpendicular through M to (AL) intersects [AL] at N and (d) at G.
 - a. Use $\cos BAL$ in triangle MAN to verify that $AN = 3.2$ cm.
 - b. Prove that: $\frac{EB}{NG} = \frac{15}{31}$.

| Question I | | |
|--------------|--|---------------------------|
| Part | Correction | Note |
| 1 | $A = \frac{1}{3} + \frac{7}{6} \div \frac{5}{3} = \frac{1}{3} + \frac{7}{6} \times \frac{3}{5} = \frac{1}{3} + \frac{7}{10} = \frac{31}{30}$. 0.25 + 0.25 | 0.50 |
| 2 | $B = \frac{5 \times 10^{-2} \times 7 \times 10^5}{2 \times 10^7} = \frac{35 \times 10^3}{2 \times 10^7} = \frac{35 \times 10^{-4}}{2} = 17.5 \times 10^{-4} = 1.75 \times 10^{-3}$ 0.25 + 0.25 + 0.25 | 0.75 |
| 3 | $C = \sqrt{45} - 4\sqrt{5} + 3\sqrt{125} = 3\sqrt{5} - 4\sqrt{5} + 15\sqrt{5} = 14\sqrt{5}$. 0.5 + 0.25 | 0.75 |
| Question II | | |
| 1 | $4x - \frac{3}{2} \leq \frac{5}{2}x + 3$; $\frac{8x}{2} - \frac{3}{2} \leq \frac{5x}{2} + \frac{6}{2}$; $8x - 3 \leq 5x + 6$; $8x - 5x \leq 3 + 6$; $3x \leq 9$; $x \leq 3$. 0.25 + 0.25 + 0.25 + 0.25 | 1 0.5 |
| 2.a | The percentage of green balls is : $\frac{108}{400} \times 100 = 27\%$ | 0.5 |
| 2.b | The percentage of white balls is: $100 - (27 + 30) = 100 - 57 = 43\%$ The number of white balls is: $\frac{43 \times 400}{100} = 172$ | 0.5 0.5 |
| Question III | | |
| 1 | $E(x) = 5(x^2 + x - 2) - (x^2 + 4x + 4) + 3x + 15 = 4x^2 + 4x + 1$. - 0.25 (MISTAKE) | 1 |
| 2 | $E(x) = 1$ so $4x^2 + 4x = 0$. where $4x(x + 1) = 0$; $x = 0$ or $x = -1$. 0.25 + 0.25 | 0.5 |
| 3.a | $H(x) = 9x^2 - (2x + 1)^2 = (3x + 2x + 1)(3x - 2x - 1) = (x - 1)(5x + 1)$. 0.5 + 0.5 | 1 |
| 3.b | $H(x) = 0$; $(x - 1)(5x + 1) = 0$. So $x = 1$ or $x = -\frac{1}{5}$ | 0.5 |
| Question IV | | |
| 1 |  | 0.5 |
| 2 | $y_G = -2x_G + 3$ then $3 = -2(0) + 3$ $3 = 3$ so G is a point on (d) Two points are enough to draw a line : | 0.5 0.25 |
| 3.a | $y_E = \frac{1}{2}x_E - 2$ $1 = \frac{1}{2}(6) - 2$ $1 = 1$ so E is a point on (AE). $y_A = \frac{1}{2}x_A - 2$ $-2 = \frac{1}{2}(0) - 2$ $-2 = -2$ so A is a point on (AE). | 0.5 0.5 |
| 3.b | $a_{(d)} \times a_{(AE)} = -2 \times \frac{1}{2} = -1$ So (d) \perp (AE). | 0.5 |

| | | | |
|-----|---|--|--|
| 3.c | $y_B = \frac{1}{2}x_B - 2$ $-1 = \frac{1}{2}(2) - 2$ $-1 = -1 \text{ so B is a point on (AE).}$ | $y_B = -2x_B + 3$ $-1 = -2(2) + 3$ $-1 = -1 \text{ so B is a point on (d).}$ | 0.5 0.25 |
| 3.d | $\text{GBE} = 90^\circ \text{ (since (d) } \perp \text{ (AE))}$ $\text{BG} = 2\sqrt{5}.$ $\text{BE} = 2\sqrt{5}.$ <p>So GBE is a right isosceles triangle of vertex B.</p> | | 0.25 0.25 0.25 0.25 |
| 4.a | <p>We have: $\overline{\text{BG}} = \overline{\text{EM}}$ so BEMG is a parallelogram</p> <p>And since: $\text{GBE} = 90^\circ$ then it is a rectangle</p> <p>and: $\text{BG} = \text{BE}$ so it is a rhombus. therefore: BEMG is a square.</p> | | 0.25 0.25 0.25 |
| 4.b | $\text{BM} = \text{GE} = \sqrt{(6-0)^2 + (1-3)^2} = \sqrt{36+4} = \sqrt{40} = 2\sqrt{10} \text{ u (diagonals in a square are equal)}$ | | 0.5 |

Question V

| | | | |
|-----|--|--|--|
| 1 |  | | 0.5 |
| 2 | <p>Using pythagorean :</p> $\text{AL}^2 = \text{AB}^2 + \text{BL}^2 = 100 + 7.5^2 = \frac{625}{4} \text{ so: AL} = 12.5 \text{ cm}$ | | 0.5 0.25 |
| 3 | $\cos \text{BAL} = \frac{\text{AB}}{\text{AL}} = \frac{10}{12.5} = \frac{4}{5}$ | | 0.5+0.25 0.5 |
| 4.a | <p>The two triangles ABL and LBE have:</p> <ul style="list-style-type: none"> L (common angle) $\text{B} = \text{E} = 90^\circ$ (ABE is an inscribed triangle in a semi-circle) <p>So they are similar.</p> $S_{\text{ABL}}^{ABL}, \frac{\text{AB}}{\text{BE}} = \frac{\text{BL}}{\text{EL}} = \frac{\text{AL}}{\text{BL}} = \frac{12.5}{7.5} = \frac{5}{3}$ | | 0.5 0.5 0.5 |
| 4.b | <p>Consider $\frac{\text{BL}}{\text{EL}} = \frac{5}{3}$; $\frac{7.5}{\text{EL}} = \frac{5}{3}$; $\text{EL} = 4.5 \text{ cm}$</p> | | 0.25 0.25 |
| 5.a | <p>$\cos \text{BAL} = \frac{4}{5}$ and $\cos \text{BAL} = \cos \text{NAM} = \frac{\text{AN}}{\text{AM}} = \frac{4}{5}$ so $\text{AN} = 3.2 \text{ cm}$</p> | | 0.25 0.25 0.5 |
| 5.b | <p>(EB) // (NG) Using Thales' $\frac{\text{LE}}{\text{LN}} = \frac{\text{EB}}{\text{NG}} = \frac{4.5}{9.3} = \frac{15}{31}$ ($\text{LN} = 12.5 - 3.2 = 9.3 \text{ cm}$)</p> | | 0.25 0.5 0.25 |