

الاسم:  
الرقم:مسابقة في الرياضيات  
المدّة: ساعتان

عدد المسائل : سبعة

: يسمح باستعمال آلة حاسبة غير قابلة للبرمجة أو لاختزان المعلومات أو لرسم البيانات. ملاحظة  
يستطيع المرشح الإجابة بالترتيب الذي يناسبه (دون الالتزام بترتيب المسائل الوارد في المسابقة)

**I- (1 point)**

Solve the following inequality :

$$4(2x - 1) \geq 9x - 7.$$

**II- (1 ½ points)**

The students of a school are distributed in the following way :

- 47 % are in the elementary section.
  - 27 % are in the intermediate section.
  - 130 students are in the secondary section.
- 1) What is the percentage of students in the secondary section ?
  - 2) Calculate the number of students of this school.

**III- (2½ points)**Given the expression :  $E = (2x + 3)^2 + (x - 1)(2x + 3)$ .

- 1) Expand and reduce E .
- 2) Calculate the exact value of E for  $x = \sqrt{2}$  .
- 3) Factorize E.
- 4) Solve the equation :  $(3x + 2)(2x + 3) = 0$ .

**IV- (2½ points)**

1) Solve the following system, showing all the steps of calculation :

$$\begin{cases} x + y = 11 \\ 2x + 5y = 34 \end{cases}$$

2) A survey was made to find the number of books read by the students of a certain class. The results are grouped in the following statistical table.

Number of read books	1	2	3	4	5	6
Number of students	5	x	4	3	y	2

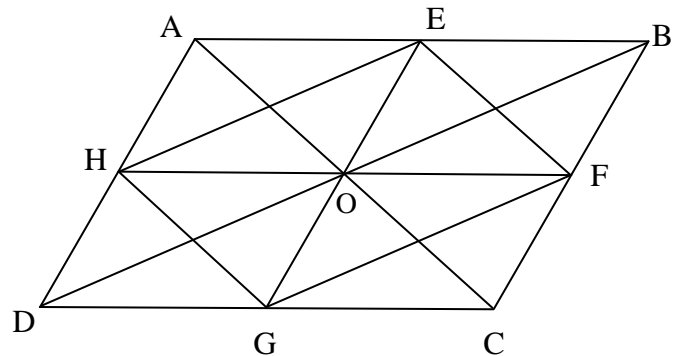
We know moreover that the number of students of this class is 25 and the mean of read books is 3.  
Calculate x and y.

**V- (2 ½ points)****Remark :***It is not required to reproduce the opposite figure.*

In this figure, ABCD is a parallelogram of center O and the points E, F, G and H are the midpoints of the sides.

Reproduce and complete the following phrases.

- 1) The symmetrical of triangle GOD about point O is the triangle ... .
- 2) The image (translate) of E by the translation of vector  $\overrightarrow{AO}$  is the point ... .
- 3) The point F is the image (translate) of point ... by the translation of vector  $\overrightarrow{DO}$  .

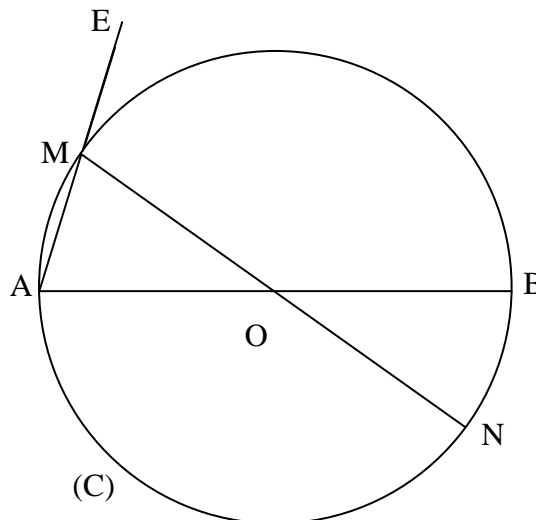


- 4)  $\overrightarrow{FE} + \dots = \overrightarrow{FG}$ .
- 5)  $\overrightarrow{AE} + \overrightarrow{AH} = \dots$
- 6)  $\overrightarrow{FE} + \overrightarrow{BC} = \dots$

**VI- (4 ½ points)**

In the opposite figure :

- (C) is a circle of center O, [AB] is a fixed diameter of (C) such that  $AB = 6\text{cm}$ .
- [MN] is a variable diameter of (C).
- E is the symmetrical of A with respect to M.



- 1) Reproduce this figure.
- 2) a- Prove that (OM) and (BE) are parallel.  
b- Prove that (BM) is the perpendicular bisector of [AE] .  
c- Prove that triangle ABE is isosceles of principal vertex B.  
d- Prove that when M moves on (C), the point E moves on a fixed circle whose center and length of radius are to be determined.
- 3) Let I be the intersection point of the straight lines (EN) and (AB).  
a- Prove that the two triangles ION and IBE are similar and deduce that :  $IB = 2 \times IO$ .  
b- Calculate IO and IB.  
c- Is I the center of gravity of triangle MBN ? Justify.  
d- (EN) cuts (MB) in F. Prove that (OF) is perpendicular to (MB).

**VII- (5 ½ points)**

Consider in an orthonormal system of axes  $x' O x$ ,  $y' O y$ , the points :

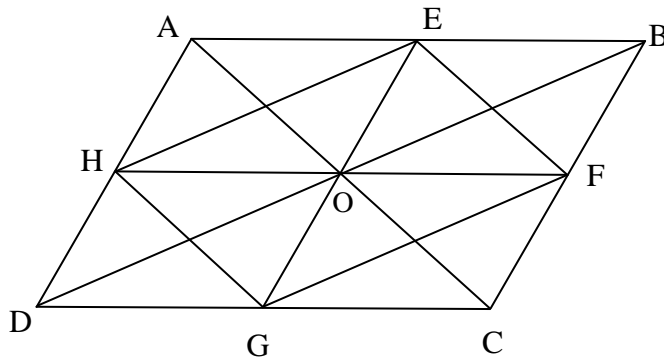
$A(-3 ; 3)$ ,  $B(2 ; -2)$ ,  $G(-4 ; -2)$  and  $E(2 ; 2)$ .

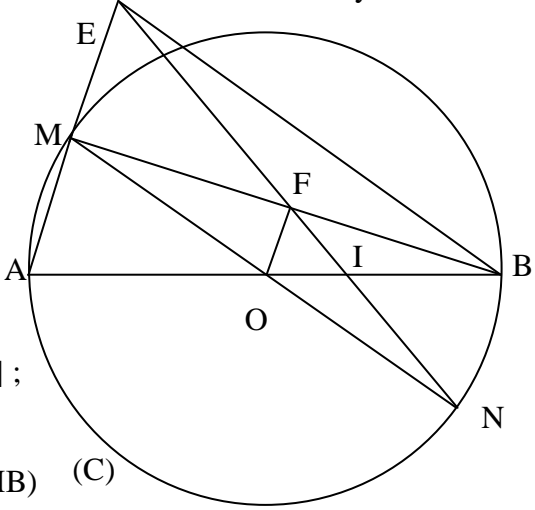
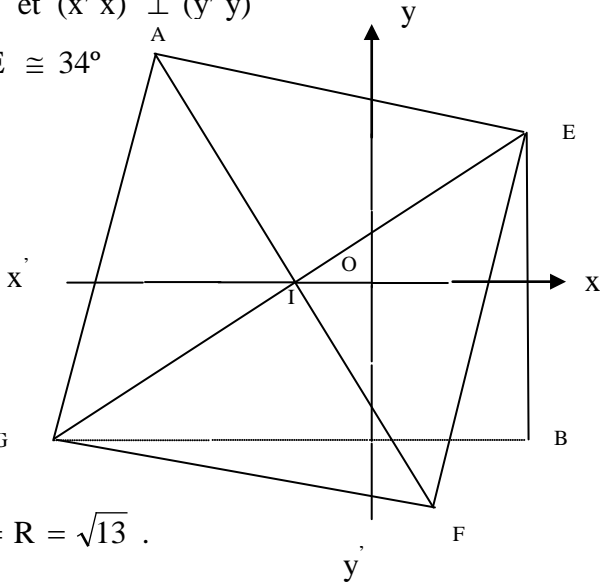
- 1) Plot the points A, B, G and E.
- 2) a- Justify that the straight line (BE) is parallel to  $(y' y)$  and that the straight line (BG) is parallel to  $(x' x)$ .  
b- Prove that the triangle BGE is right angled at B.  
c- Calculate  $\tan \widehat{BGE}$  and calculate, rounded to the nearest degree, the angle  $\widehat{BGE}$ .
- 3) Designate by (C) the circle circumscribed about triangle BGE, prove that its center is the point  $I(-1 ; 0)$ , and calculate the exact value of its radius.
- 4) Prove that A is a point of the circle (C).
- 5) a- Find the equation of the straight line (GE).  
b- Prove that (GE) and (AI) are perpendicular.  
c- Let F be the point such that  $\overrightarrow{AE} + \overrightarrow{AG} = \overrightarrow{AF}$  .  
Prove that the quadrilateral AGFE is a square.



توزيع علامات مسابقة الرياضيات

Questions	Eléments de réponses	Notes
I-	$8x - 4 \geq 9x - 7 ; -x \geq -3$ alors $x \leq 3$	$\frac{1}{4} + \frac{1}{2} + \frac{1}{4}$
II-	1) $100 - (47 + 27) = 26$ soit 26 % 2) $\frac{26}{100} = \frac{130}{N}$ alors $N = \frac{130 \times 100}{26} = 500$	$\frac{3}{4}$ $\frac{3}{4}$
III-	1) $E = 4x^2 + 9 + 12x + 2x^2 + 3x - 2x - 3$ $= 6x^2 + 13x + 6$ 2) $E(\sqrt{2}) = 6(\sqrt{2})^2 + 13\sqrt{2} + 6 = 18 + 13\sqrt{2}$ 3) $E = (2x + 3)(2x + 3 + x - 1)$ $= (2x + 3)(3x + 2)$ 4) $2x + 3 = 0$ alors $x = -\frac{3}{2}$ ou $3x + 2 = 0$ alors $x = -\frac{2}{3}$	$\frac{1}{4}$ $\frac{1}{4}$ $\frac{1}{2}$ $\frac{1}{2}$ $\frac{1}{4}$ $\frac{3}{4}$
IV-	1) $\begin{cases} -2x - 2y = -22 \\ 2x + 5y = 34 \end{cases}$ , $3y = 12$ alors $y = 4$ et $x = 7$ . 2) $5 + x + 4 + 3 + y + 2 = 25$ ; $\frac{1 \times 5 + 2 \times x + 3 \times 4 + 4 \times 3 + 5 \times y + 6 \times 2}{25} = 3$ $x + y = 11$ $2x + 5y = 34$ alors $x = 7$ et $y = 4$ .	$\frac{1}{2}, \frac{1}{4} + \frac{1}{4}$ $\frac{1}{2}; \frac{1}{2}$ $\frac{1}{2}$
V-	1) EOB 2) F 3) G 4) $\overrightarrow{FE} + \overrightarrow{EG} = \overrightarrow{FG}$ 5) $\overrightarrow{AE} + \overrightarrow{AH} = \overrightarrow{AO}$ 6) $\overrightarrow{FE} + \overrightarrow{BC} = \overrightarrow{FG}$	$\frac{1}{4}$ $\frac{1}{4}$ $\frac{1}{2}$ $\frac{1}{2}$ $\frac{1}{2}$ $\frac{1}{2}$



Questions	Éléments de réponses	Notes
<b>VI</b> 1) 2) a- b- c- d- 3) a- b- c- d-	Figure Théorème des milieux ... O milieu de [AB] et M milieu de [AE] $BMA = 90^\circ$ et M milieu de [AE] B appartient à la médiatrice de [AE] B fixe $BE = BA = 6$ alors E décrit le cercle de centre B et de rayon 6. (ON) // (BE) ou ... $\frac{IO}{IB} = \frac{ON}{BE} = \frac{3}{6} = \frac{1}{2}$ alors $IB = 2IO$ $IB = 2IO$ ; $IO = 1$ et $IB = 2$ [BO] médiane et $\frac{IO}{BO} = \frac{1}{3}$ ou ... [MI] médiane alors F milieu de [MB] ; (OF) // (MA) Théorème des milieux alors (OF) $\perp$ (MB) (C) 	$\frac{1}{4}$ $\frac{1}{2}$ $\frac{1}{2}$ $\frac{1}{4}$ $\frac{1}{2}$ $\frac{1}{2}$ $\frac{1}{4} + \frac{1}{4}$ $\frac{1}{2}$ $\frac{1}{2}$
<b>VII</b> 1) 2) a- b- c- 3) 4) 5) a- b- c-	Placer A, B, G et E $x_B = x_E = 2$ , $y_B = y_G = -2$ (BG) // ( $x'x$ ) ; (BE) // ( $y'y$ ) et ( $x'x$ ) $\perp$ ( $y'y$ ) $\tan BGE = \frac{BE}{BG} = \frac{2}{3}$ ; $BGE \cong 34^\circ$ $x_I = \frac{x_G + x_E}{2} = -1$ et $y_I = \frac{y_G + y_E}{2} = 0$ , $IE = R = \sqrt{13}$ . $IA = \sqrt{13} = R$ . $a = \frac{2}{3}$ et $b = \frac{2}{3}$ équation de (GE) : $y = \frac{2}{3}x + \frac{2}{3}$ . $a_{(AI)} = \frac{y_I - y_A}{x_I - x_A} = -\frac{3}{2}$ alors $a_{(AI)} \times a_{(GE)} = -1$ donc (AI) $\perp$ (GE) $\vec{AE} + \vec{AG} = \vec{AF}$ donc AGFE est un parallélogramme $GAE = 90^\circ$ (AI) $\perp$ (GE) alors AGFE est un carré. 	$\frac{1}{2}$ $\frac{1}{4} + \frac{1}{4}$ $\frac{1}{2}$ $\frac{1}{2} + \frac{1}{2}$ $\frac{1}{4} + \frac{1}{4}$ $\frac{1}{2}$ $\frac{3}{4}$ $\frac{1}{2}$ $\frac{3}{4}$